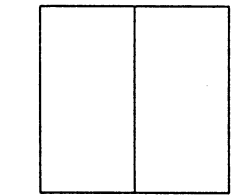
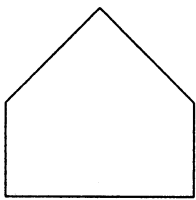


### PROBLEM 1-14

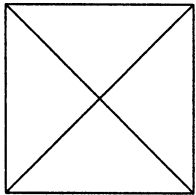
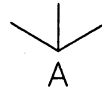

Given the multiviews of the objects below, prepare an isometric sketch in the location provided for each.



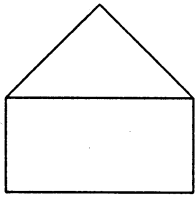
A



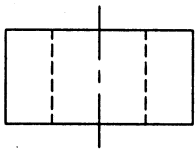
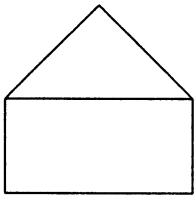
A



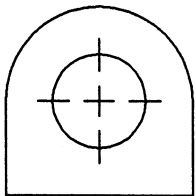
A



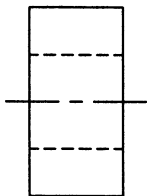
A



A



A



**PROBLEM 1-15**

Given the multiviews of the house below, prepare an isometric sketch in the space provided.

